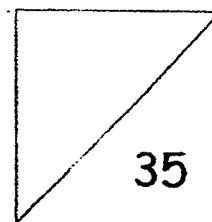




HENRY PARK PRIMARY SCHOOL
MATHEMATICS
PRIMARY 2 (TERM 3)
TOPICAL QUIZ 3



Name: _____

Date: _____

Class: Pr 2 _____

Parent's Signature: _____

Section A: Multiple Choice Questions (4 x 1 mark = 4 marks)

Choose the correct answer and write its number in the brackets provided.

1. _____ and 45¢ make \$1.

(1) 35¢

(2) 55¢

(3) 65¢

(4) 145¢

()

2. Iffah spent 150 cents during recess.

What was the amount she spent in dollars and cents?

(1) \$0.15

(2) \$1.50

(3) \$15.00

(4) \$150.00

()

3. $8 \times 4 = \underline{\hspace{2cm}}$

(1) 2

(2) 12

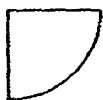
(3) 32

(4) 36

()

4. Which one of the following figures is a semicircle?

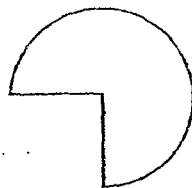
(1)



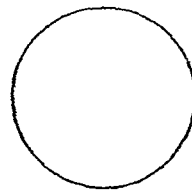
(2)



(3)



(4)




()

Section B: Open - Ended Questions

Questions 5 to 13 carry 1 mark each. Questions 14 to 16 carry 2 marks each. Fill in your answers in the boxes provided.


5. Write the amount of money shown in the box in numerals.



\$

6. A crayon set costs \$4.95.


Circle the amount of money needed to buy the crayon set.



7. $18 = 2$ groups of 3 + _____ groups of 3

equal

8. Divide the apples into 8 groups. Write a division equation in the boxes below.



$$\square \div \square = \square$$

9. I have 4 sides. They are all straight lines and the same length.

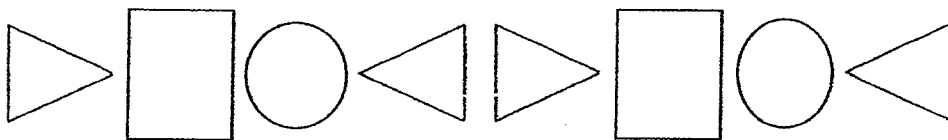
What shape am I?



10. How many semicircles make 4 circles?




11.



?

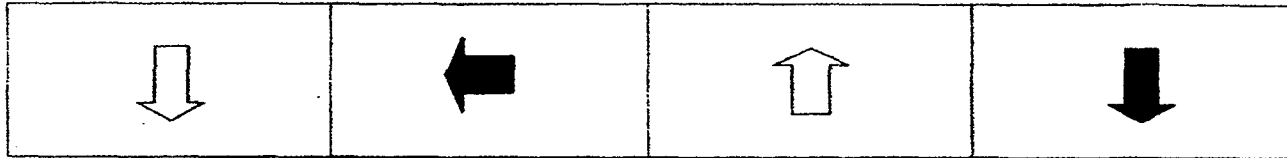
Circle the next shape.



12.



Circle the next shape.



13. Raini has one 20-cent coin and two 10-cent coins. How much money does she have?

	\$
--	----

14. Catherine bought 3 items and paid \$2 for them.

Which 3 items did she buy? Circle the 3 items.



Sweets

35¢



Lychee Drink

50¢



Potato Chips

95¢



Water

70¢



Lollipop

65¢



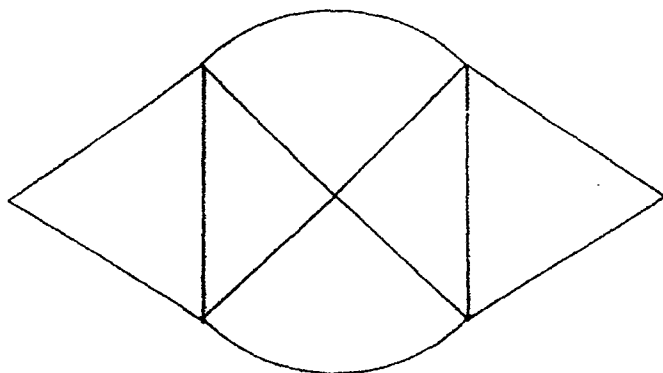
Milo

90¢

15. Sarah has 3 boxes. She places 8 ball in each box. How many balls are there altogether?

balls

16. Count the number of triangle(s) and quarter circle(s) used to form the picture below.



triangle(s)

quarter circle(s)

Section C: Word Problems

Questions 17 to 20 carry 4 marks each.

Read each question carefully. Show your equations and word statements clearly in the spaces provided.

17. Sam bought a bag for \$25 and a wallet for \$18.

He gave the cashier \$50.

How much change did he receive?

Working

18a. Mr Lim had 27 fish balls.

He sold them in sticks of 3.

How many sticks of fish balls did he sell?

Working

18b. Meiling bought 5 sticks of fish balls.

How many fish balls did she buy?

Working

19. A stationery set containing 1 eraser and 2 pencils costs 85¢.

One pencil costs 30¢.

How much does the eraser cost?

Working

20a. 5 postcards cost \$10.

How much did each postcard cost?

Working

20b. Aini bought 7 such postcards.

How much did she spend altogether?

Working


EXAM PAPER 2015**LEVEL : PRIMARY 2****SCHOOL : HENRY PARK PRIMARY SCHOOL****SUBJECT : MATHEMATICS****TERM : QUIZ 3**

Q1	Q2	Q3	Q4
2	3	3	2

Q5. 1575

Q6. SEE PICTURE

Q7. 4

Q8. $16 \div 2 = 8$ Q9. Square Q10. 8 Q11. 

Q12. Q13. 40 cents Q14. sweets / lychee dink / mili

Q15. 24 balls

Q16. 4 triangles

Q16. 2 quarter circle

Q17. \$43 $25 + 18 = 43$ Q18a 9 sticks of fishballs - $27 \div 3 = 9$ Q18b. 15 fish balls $3 \times 5 = 15$ Q19. 25 cents $30 + 30 = 60$, $85 - 60 = 25$ Q20a. \$2 $\rightarrow 10 \div 5 = 2$ Q20b. \$14 $\rightarrow 7 \times 2 = 14$

Q6

